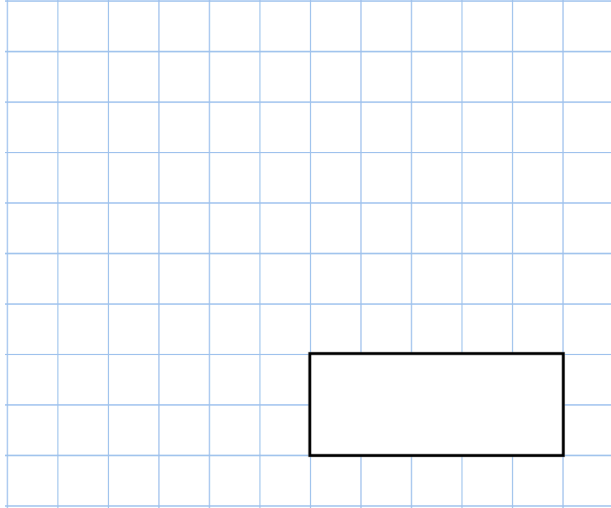


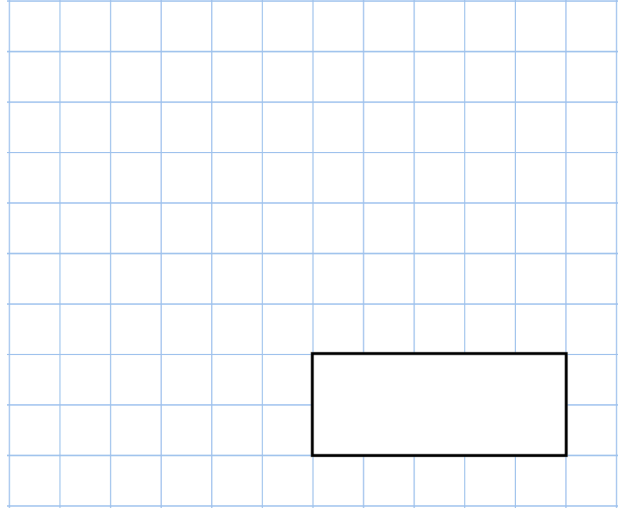


10th February

$30 \div 2$



$80 - 12$

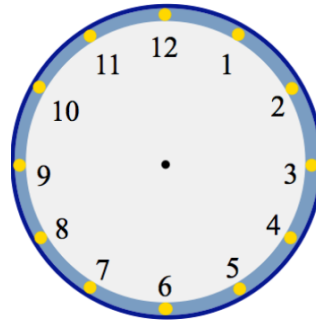


Natalie has 8 fifty pence pieces



How much money does Natalie have?

Show the time 2:30 on the clock



Large coach	53 seats
Minibus	19 seats

A school brings a large coach and a minibus on a trip.

They are both full.

How many people go on the trip?